

Nome: _____



Turma: _____

Professor (a): _____


Data: _____

QUE HORAS SÃO?


Leia o horário nos relógios digitais e desenhe os ponteiros nos relógios analógicos correspondentes. Lembre-se de que o ponteiro menor marca as horas e o ponteiro maior os minutos.




02 : 00




12 : 30




07 : 30



05 : 00



08 : 00



06 : 00