

Nome: _____

Turma: _____

Professor (a): _____


Data: _____

QUE HORAS SÃO?


Leia o horário nos relógios digitais e desenhe os ponteiros nos relógios analógicos correspondentes, conforme o exemplo. Lembre-se de que o ponteiro menor marca as horas e o ponteiro maior os minutos.




Exemplo:




08:00




05:45



03:10



12:55



07:25