

NOME _____

DATA: _____

PROFESSOR (A): _____

TURMA: _____

ADIÇÃO


Realize as adições de acordo com o valor de cada figura:



+




=



+




=



+



=



+



=

