


Nome: _____

Turma: _____

Professor (a): _____

Data: _____

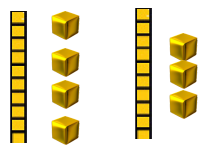
ADIÇÃO COM MATERIAL DOURADO



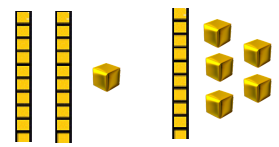
Resolva as adições utilizando o material dourado e registre o resultado conforme o modelo:

$23 + 12 = 35$

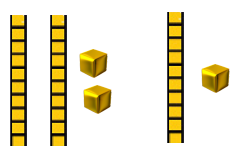
a) $14 + 13 = \underline{\quad}$



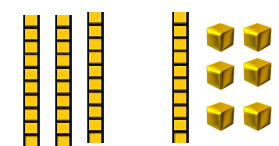
b) $21 + 15 = \underline{\quad}$



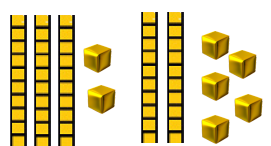
c) $22 + 11 = \underline{\quad}$



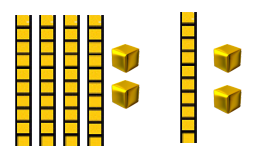
d) $30 + 16 = \underline{\quad}$



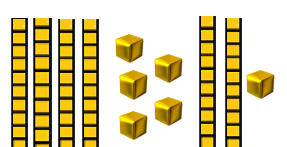
e) $32 + 25 = \underline{\quad}$



f) $42 + 12 = \underline{\quad}$



g) $45 + 21 = \underline{\quad}$



h) $47 + 20 = \underline{\quad}$

